

## Water Walk Reasoning



**Saraswoti**



Leaves the school  
at



Arrives at the well  
at



**Mina**



Leaves the school  
at











Arrives at the well  
at



Who will take longer to reach the village well?  
Show how you work it out.

## Now it's your turn!

 	 Leaves the school at	 Arrives at the well at
 	 Leaves the school at	 Arrives at the well at



Draw your own people and write in the time that they leave school and arrive at the well on the clocks. Challenge your friends to work out how long it will take for each of them to reach the village well!